



# Ways to make 5


Directions: Use dot markers or colored pencils to make 5. Then record your answer.




$$\underline{1} + \underline{\quad} = \underline{5}$$




$$\underline{2} + \underline{\quad} = \underline{5}$$



$$\underline{3} + \underline{\quad} = \underline{5}$$



$$\underline{4} + \underline{\quad} = \underline{5}$$



$$\underline{5} + \underline{\quad} = \underline{5}$$



$$\underline{0} + \underline{\quad} = \underline{5}$$